


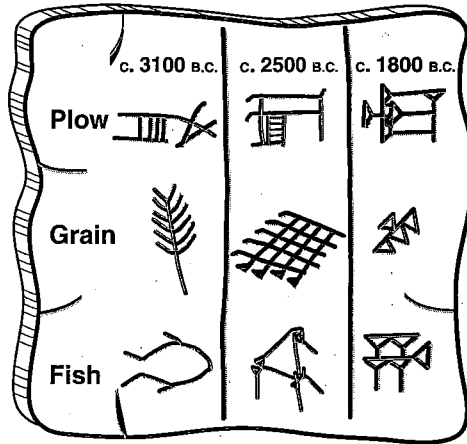
Name: \_\_\_\_\_

Date: \_\_\_\_\_



# The Cities of Sumer

Write about each aspect of Sumerian culture listed below. For help, you may refer to pages 58 to 63 in your textbook.



1. Which Sumerian invention was the most important and why? Describe this invention.

---

---

---

---

---

2. Describe Sumerian religious practices.

---

---

---

3. Imagine you are a Sumerian from a poor family of craftworkers. Describe a day in your life. Where did you live? How was your dwelling furnished? What was the role of the male, the female? How did you spend your free time?

---

---

---

---

# Solve Sumerian Math Equations

Name \_\_\_\_\_

Solve the following mathematical equations using the Sumerian number system. Place the number under each Sumerian symbol on the line provided. Refer to the chart to help you decipher the symbols.

A.  +  = 

\_\_\_\_\_

B.  -  = 

\_\_\_\_\_

C.  +  = 

\_\_\_\_\_

D.  ÷  = 

\_\_\_\_\_

E.  ×  = 

\_\_\_\_\_

F.  ÷  = 























\_\_\_\_\_

G.  +  +  = 

\_\_\_\_\_

H.  -  -  = 

\_\_\_\_\_

				
1	2	3	4	5
				
6	7	8	9	
				
10	11	12	13	
				
20	30	40		
				
50	60	70	80	
				
120	130			